



PREFEITURA MUNICIPAL DE PARANAGUÁ
Secretaria Municipal de Educação e Ensino Integral

CADERNO DE ATIVIDADES Nº17 DA CLASSE ESPECIAL



De 31/8 a 04/9

LÍNGUA PORTUGUESA

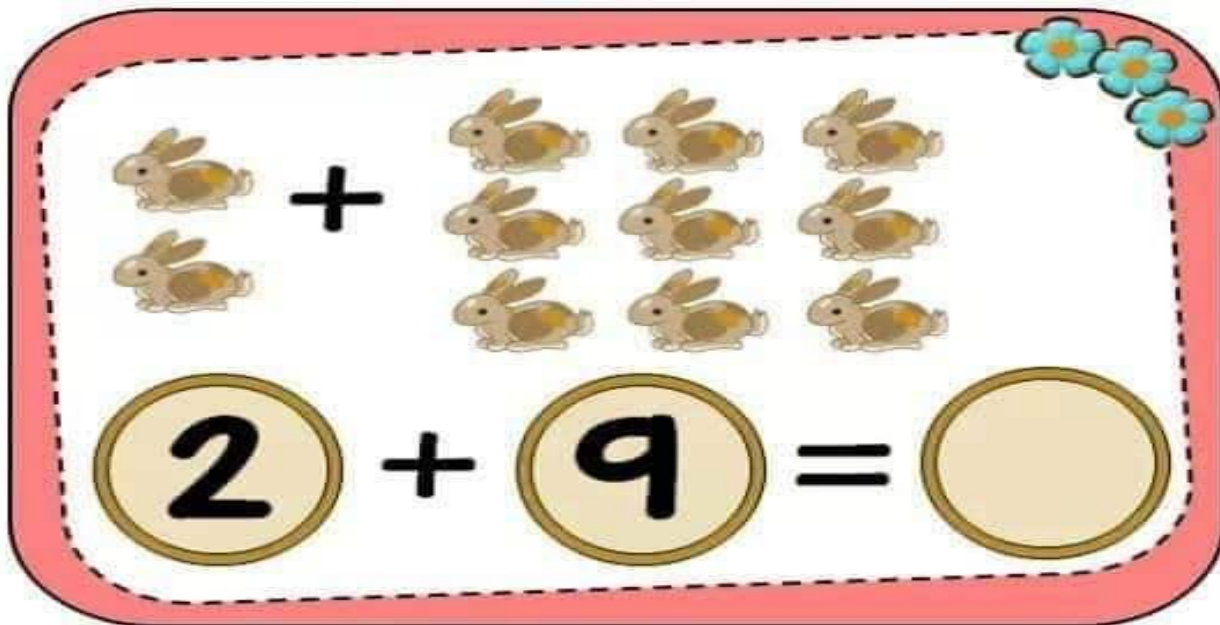
- CONSTRUÇÃO DO SISTEMA ALFABÉTICO. (EF01LP03)

PINTE A PLACA ONDE SE ENCONTRA O NOME DA IMAGEM ACIMA

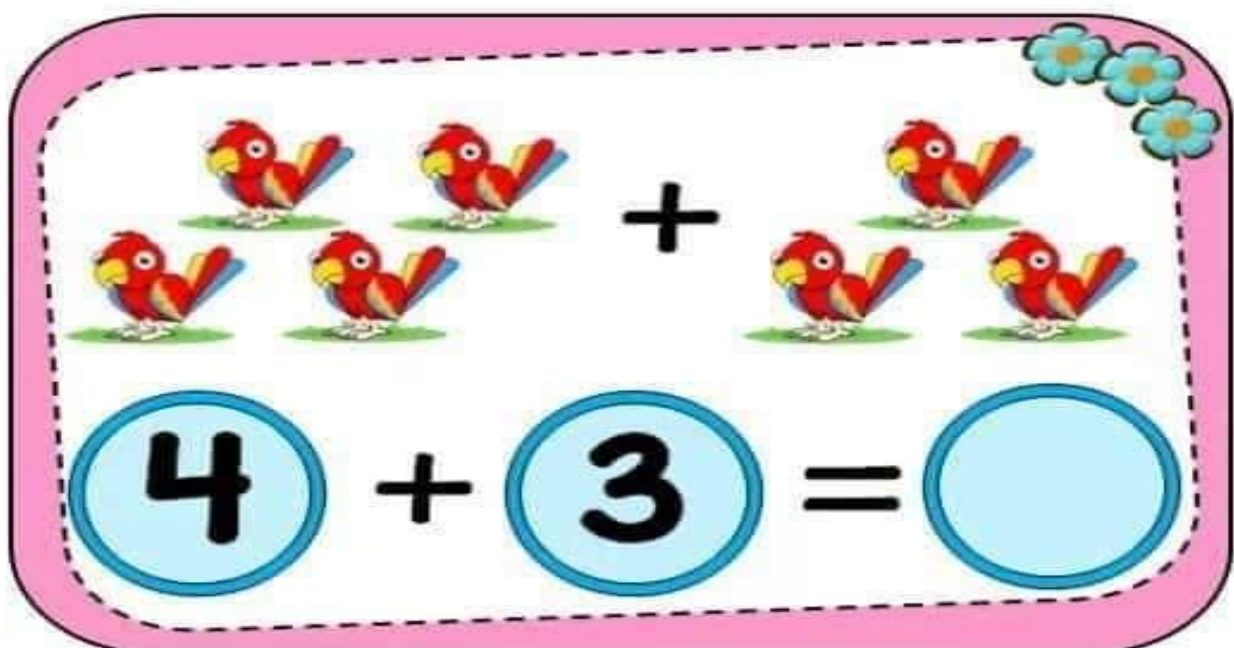
 SACO SAPO SALA	 CEDO SECO SELO	 SINO SÍTIO PINO
 SOFÁ SONO SOPA	 SOCO SUMIU SUCO	 SALA SACOLA SALADA
 CENOURA SERROTE MALOTE	 SACOLA SALA SALADA	 SONO SOPA SOFÁ

MATEMÁTICA

- ADIÇÃO (EF01MA07).
AGORA VAMOS CONTAR E REGISTRAR



A red-bordered rounded rectangle containing a math problem. On the left, two brown rabbits are shown. To their right is a plus sign. Further right, nine brown rabbits are arranged in a 3x3 grid. To the right of the grid is an equals sign, followed by an empty circle for the answer. In the top right corner, there are four blue flowers.

$$2 + 9 = \bigcirc$$


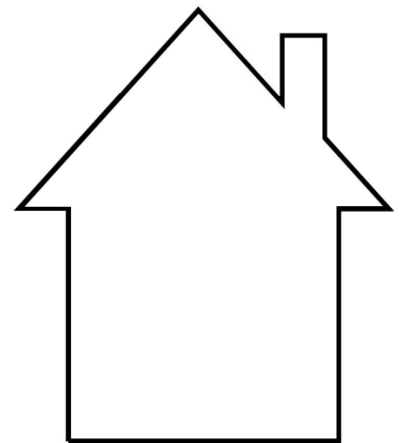
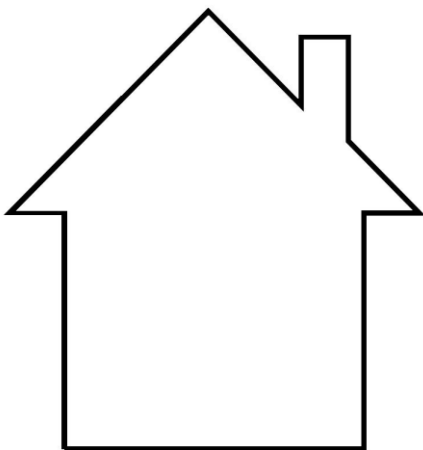

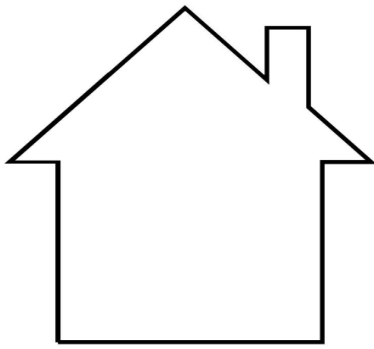
A pink-bordered rounded rectangle containing a math problem. On the left, four red parrots are shown in two rows of two. To their right is a plus sign. Further right, three red parrots are shown in two rows (one on top, two on the bottom). To the right of the parrots is an equals sign, followed by an empty circle for the answer. In the top right corner, there are four blue flowers.

$$4 + 3 = \bigcirc$$





PREFEITURA MUNICIPAL DE PARANAGUÁ
Secretaria Municipal de Educação e Ensino Integral

ESCREVA O ANTECESSOR E SUCESSOR(O QUE VEM ANTES DO NÚMERO 1 E DEPOIS .



CIÊNCIAS


- HÁBITOS DE HIGIENE. (EF01CI02).
- JOGO DOS 4 ERROS ENCONTRE OS ERROS NO DESENHO A ABAIXO E MARQUE UM X.



HISTÓRIA

- DATA COMEMORATIVA; (EF02HI01).

PINTE RECORTE E MONTE O QUEBRA-CABEÇA



GEOGRAFIA

- MEIOS DE TRANSPORTE (EF02GE03);

 OBSERVE A CENA E FAÇA O QUE SE PEDE:

- PINTE OS MEIOS DE TRANSPORTE AÉREOS.
- CIRCULE OS MEIOS DE TRANSPORTE AQUÁTICOS.
- FAÇA UM X NOS MEIOS DE TRANSPORTE TERRESTRES.

